

Geometry and Measurement Worksheet

Measure Twice, Cut Once

Draw the following:

1. Point.

2. Line.

3. Line segment.

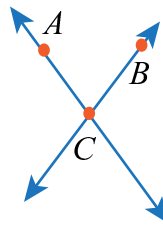
4. Ray

5. Parallel Lines

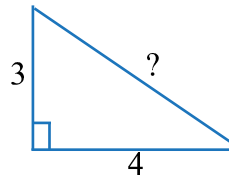
6. Perpendicular lines.

7. Plane.

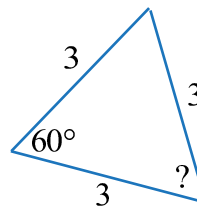
8. Where do the lines intersect?



9. Find the missing side of the triangle.



10. Find the missing angle of the triangle.



©2011 Shmoop University, Inc. All rights reserved. For classroom use only. Want to print this out for your classroom? Go for it. All other reproduction and distribution is prohibited.

<http://www.shmoop.com/pre-algebra/>
Shmoop will make you a better lover (of literature, math, life...)